



Student Name: _____

Educators: Please remember to use the script provided to administer this assessment.

<input type="checkbox"/> 1 1 point	1 Marcos planted 12 flowers on Monday. He planted 7 more flowers on Tuesday. How many flowers did Marcos plant?
<input type="checkbox"/> 2 1 point	2 $\square - 8 = 9$
<input type="checkbox"/> 3a 1 Point Answer <input type="checkbox"/> 3b 1 Point Strategy	3 On the playground there were 9 children on the swings. 7 children were in line for the slide. How many children were on the playground?



Student Name: _____

<p><input type="checkbox"/> 4 1 Point</p>	<p>4</p> <p> </p> <p>How many shapes are there? _____</p> <p>Which number sentence below matches the shapes? Circle your answer.</p> <p>A $8 + 6 = 14$</p> <p>B $8 + 5 = 13$</p> <p>C $7 + 6 = 13$</p> <p>D $9 + 5 = 14$</p>
<p><input type="checkbox"/> 5a 1 Point Answer</p> <p><input type="checkbox"/> 5b 1 Point Strategy</p>	<p>5</p> <p>Eduardo baked 13 cookies. Monica baked 6 cookies. How many fewer cookies did Monica bake than Eduardo?</p>

Student Name: _____

<input type="checkbox"/> 6 1 Point	6 Kendra caught 15 bugs. 8 of them crawled away. How many bugs does she have now?
<input type="checkbox"/> 7 1 Point	7. Look at this number sentence. $8 + 2 + 14 = 24$ Circle the numbers that make 10.
<input type="checkbox"/> 8a 1 Point Answer <input type="checkbox"/> 8b 1 Point Explanation	8 Cut this sandwich so that 4 children may share it equally. What do you call these equal parts? Show or tell me how you know they are fair shares?
____/11 TOTAL EARNED POINTS	

Kindergarten Assessment #9 Paper Sandwich to cut.



Paper Sandwich to cut.

Kindergarten Assessment #9

